

Vertical Stretching and Reflecting of Graphs

Vertical Stretching and Reflecting of Graphs

Example: Sketch the graph of

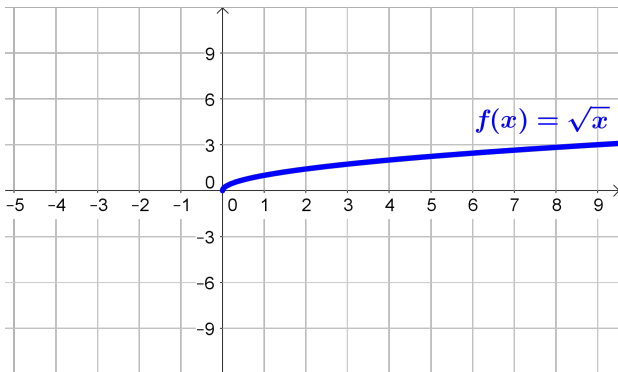
$$y = -3\sqrt{x}$$

Vertical Stretching and Reflecting of Graphs

Example: Sketch the graph of

$$y = -3\sqrt{x}$$

Here, we want to start with the basic graph: $f(x) = \sqrt{x}$



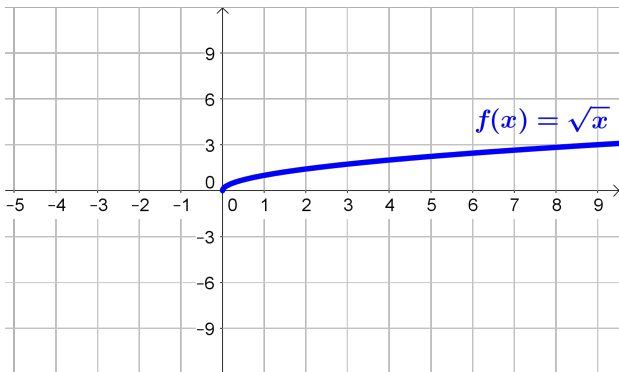
Vertical Stretching and Reflecting of Graphs

Example: Sketch the graph of

$$y = -3\sqrt{x}$$

Here, we want to start with the basic graph: $f(x) = \sqrt{x}$

▶ Multiplying $f(x)$ by 3 stretches the graph vertically by 3



Vertical Stretching and Reflecting of Graphs

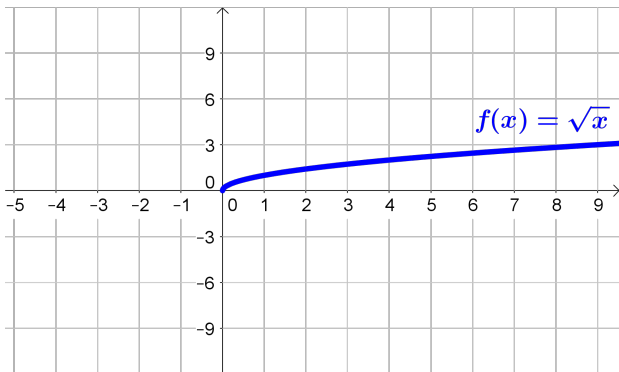
Example: Sketch the graph of

$$y = -3\sqrt{x}$$

Here, we want to start with the basic graph: $f(x) = \sqrt{x}$

▶ Multiplying $f(x)$ by 3 stretches the graph vertically by 3

▶ Multiplying $f(x)$ by -1 reflects the graph across the x -axis



Vertical Stretching and Reflecting of Graphs

Example: Sketch the graph of

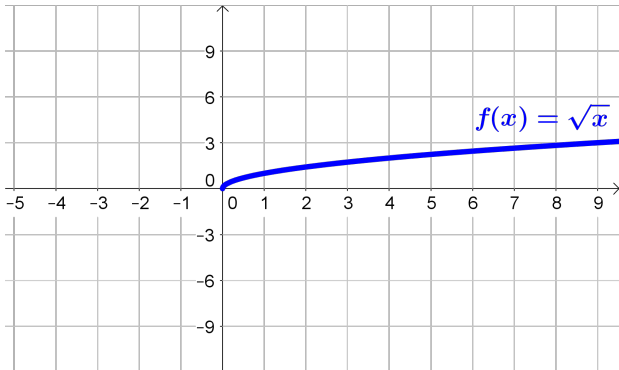
$$y = -3\sqrt{x}$$

Here, we want to start with the basic graph: $f(x) = \sqrt{x}$

▶ Multiplying $f(x)$ by 3 stretches the graph vertically by 3

▶ Multiplying $f(x)$ by -1 reflects the graph across the x -axis

What about multiplying by -3 ?



Vertical Stretching and Reflecting of Graphs

Example: Sketch the graph of

$$y = -3\sqrt{x} = -1 \cdot 3\sqrt{x}$$

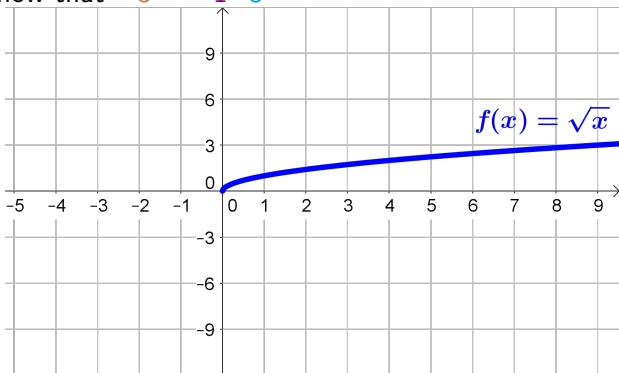
Here, we want to start with the basic graph: $f(x) = \sqrt{x}$

▶ Multiplying $f(x)$ by 3 stretches the graph vertically by 3

▶ Multiplying $f(x)$ by -1 reflects the graph across the x -axis

What about multiplying by -3 ?

We know that $-3 = -1 \cdot 3$



Vertical Stretching and Reflecting of Graphs

Example: Sketch the graph of

$$y = -3\sqrt{x} = -1 \cdot 3\sqrt{x}$$

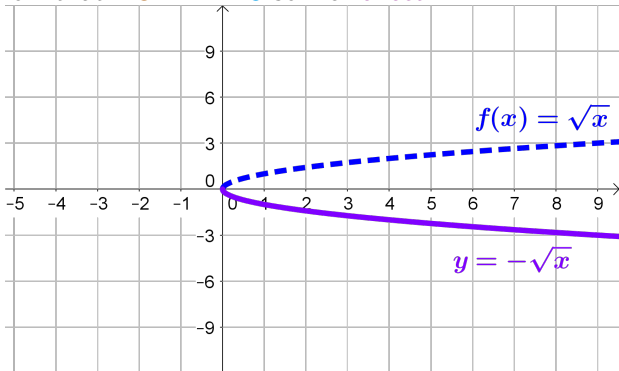
Here, we want to start with the basic graph: $f(x) = \sqrt{x}$

▶ Multiplying $f(x)$ by 3 stretches the graph vertically by 3

▶ Multiplying $f(x)$ by -1 reflects the graph across the x -axis

What about multiplying by -3 ?

We know that $-3 = -1 \cdot 3$ so we reflect



Vertical Stretching and Reflecting of Graphs

Example: Sketch the graph of

$$y = -3\sqrt{x} = -1 \cdot 3\sqrt{x}$$

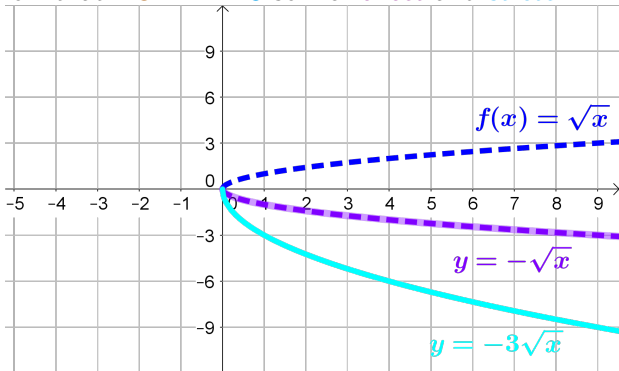
Here, we want to start with the basic graph: $f(x) = \sqrt{x}$

▶ Multiplying $f(x)$ by 3 stretches the graph vertically by 3

▶ Multiplying $f(x)$ by -1 reflects the graph across the x -axis

What about multiplying by -3 ?

We know that $-3 = -1 \cdot 3$ so we reflect and stretch



Vertical Stretching and Reflecting of Graphs

Example: Sketch the graph of

$$y = -3\sqrt{x} = -1 \cdot 3\sqrt{x}$$

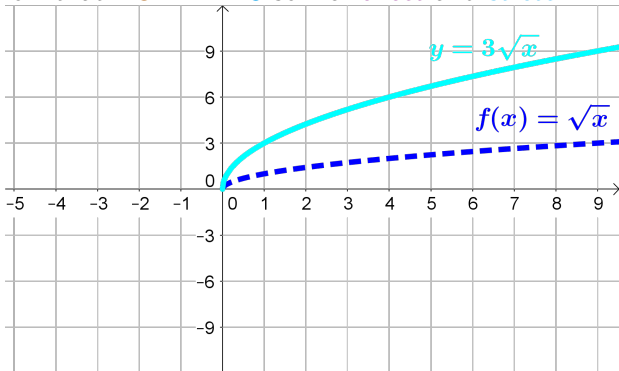
Here, we want to start with the basic graph: $f(x) = \sqrt{x}$

▶ Multiplying $f(x)$ by 3 stretches the graph vertically by 3

▶ Multiplying $f(x)$ by -1 reflects the graph across the x -axis

What about multiplying by -3 ?

We know that $-3 = -1 \cdot 3$ so we reflect and stretch



Because $-3 = -1 \cdot 3 = 3 \cdot -1$ we could stretch

Vertical Stretching and Reflecting of Graphs

Example: Sketch the graph of

$$y = -3\sqrt{x} = -1 \cdot 3\sqrt{x}$$

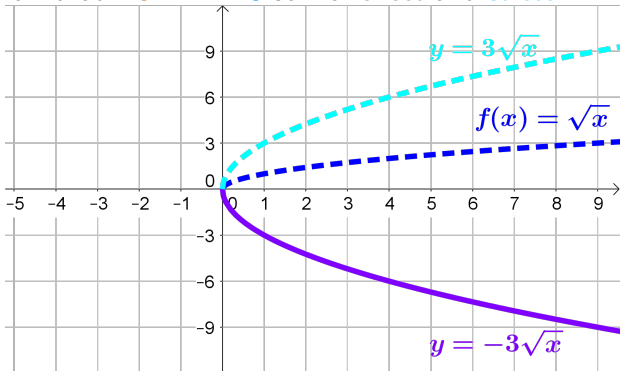
Here, we want to start with the basic graph: $f(x) = \sqrt{x}$

▶ Multiplying $f(x)$ by 3 stretches the graph vertically by 3

▶ Multiplying $f(x)$ by -1 reflects the graph across the x -axis

What about multiplying by -3 ?

We know that $-3 = -1 \cdot 3$ so we reflect and stretch



Because $-3 = -1 \cdot 3 = 3 \cdot -1$ we could stretch then reflect

Vertical Stretching and Reflecting of Graphs

Example: Sketch the graph of

$$y = -3\sqrt{x} = -1 \cdot 3\sqrt{x}$$

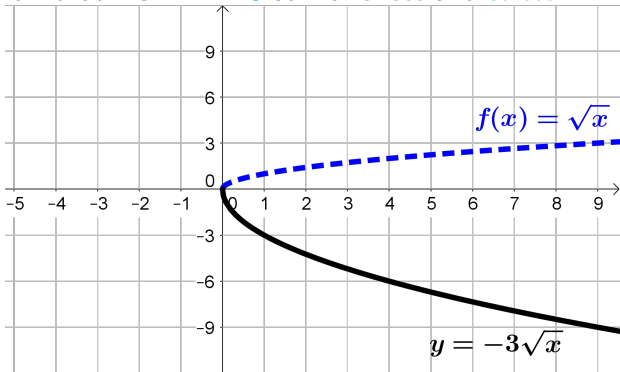
Here, we want to start with the basic graph: $f(x) = \sqrt{x}$

▶ Multiplying $f(x)$ by 3 stretches the graph vertically by 3

▶ Multiplying $f(x)$ by -1 reflects the graph across the x -axis

What about multiplying by -3 ?

We know that $-3 = -1 \cdot 3$ so we reflect and stretch



Because $-3 = -1 \cdot 3 = 3 \cdot -1$ we could stretch then reflect